

KAYUNGA DISTRICT ACADEMIC BOARD
PRIMARY SEVEN P.L.E MOCK 2022
PRIMARY SEVEN SOCIAL STUDIES

Time Allowed: 2 hours 15 minutes

RANDOM No.

--	--	--	--	--	--	--	--	--	--

Candidate's Name:

Candidate's Signature:

School Name:

Do not open this booklet until you are told to do so.

Read the following instruction carefully:

1. This paper has two Sections: **A** and **B**
2. Section **A** has **40** short questions (40 marks)
3. Section **B** has **15** questions (60 marks)
4. Answer **All** questions. All answers to both Sections **A** and **B** must be written in spaces provided.
5. All answers must be clearly written using blue ball point Pen or ink. Only diagrams should be drawn in pencils.
6. Unnecessary changes of work may lead to loss of marks.
7. Do not fill in the boxes indicated "**For examiner's use only**"

FOR EXAMINER'S USE ONLY		
Qn. No	MARKS	SIGN
01-10		
11-20		
21-30		
31-40		
41-50		
51		
52		
53		
54		
55		
TOTAL		

Turn over

SECTION A

1. What was the most important discovery of early man?

2. Why are some rivers in Africa not navigable?

3. _____



What does the road sign above tell the road user?

4. Give any one reason why Africa is no longer regarded as a dark continent.

5. State one role played by a Chief Administrative Officer in a district.

6. Identify any one problem faced by the people living in the slopes of Mt. Elgon.

7. Give a reason why the Nilotes never formed Kingdoms.

8. Name the flag that was lowered to raise the Uganda flag on 9th October 1962.

9. Give the main duty of the police in your community.

10. How does a good transport network promote trade?

11. Mention any one way NEMA helps in environmental protection.

12. What was the former name of the African Union (AU)?

13. How is the government of Uganda trying to promote education for its people?

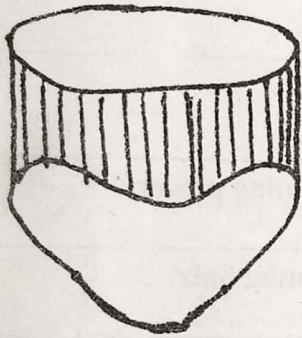
14. In which way in Uganda solving the problem of water shortage in Karamoja Sub-region?

15. Why is Dr. Leakey remembered in the history of Uganda?

16. Mention any one condition that may lead to a By-elections.

17. Give one social service that was improved by Missionaries.

18. Apart from the Equator, name one other major line of latitude.
19. How is too much rainfall dangerous in an area?
20. State any one cause of land fragmentation in the Kigezi highlands of Uganda.
21. Mention the largest continent in the world.
22. How was the formation of the rift valley different from that of volcanic mountains?
23. State the main cash crop grown in the Gezira Irrigation Scheme.
24. Suggest one reason why the crested crane was chosen as Uganda's Emblem.
- 25.



How was the above tool useful to people of long ago?

26. Which climate in East Africa is hot and wet throughout the year?
27. What does Uganda government do to ensure proper spending of the revenue it collects from her citizens?
28. Give one method used to control soil erosion in the hilly areas of Uganda.
29. Why are places near water bodies able to grow crops throughout the year?
30. State one economic value of wild animals in the development of any country.
31. Name the tool that was used by early man to trap fast running animals.
32. Why is a school sign post important in the community?
33. Mention any one problem experienced by the E.A.C today.
34. How did Africans benefit from participating in world War II?

In questions 36 to 40, answer Either Christian or Islamic BUT not both alternative of a number

35. EITHER: Why did God create Adam?

OR: Why did Allah create Adam?

36. EITHER: Mention the first religion to be introduced in Uganda.

OR: Which group of people introduced Islam in Uganda?

37. EITHER: Why did God send Moses to Egypt?

OR: Name the prophet in Islam remembered for endurance.

38. EITHER: How do Christians benefit from Tithing?

OR: Why do Muslims give Zakat?

39. EITHER: State one way Christians show respect to God during prayers.

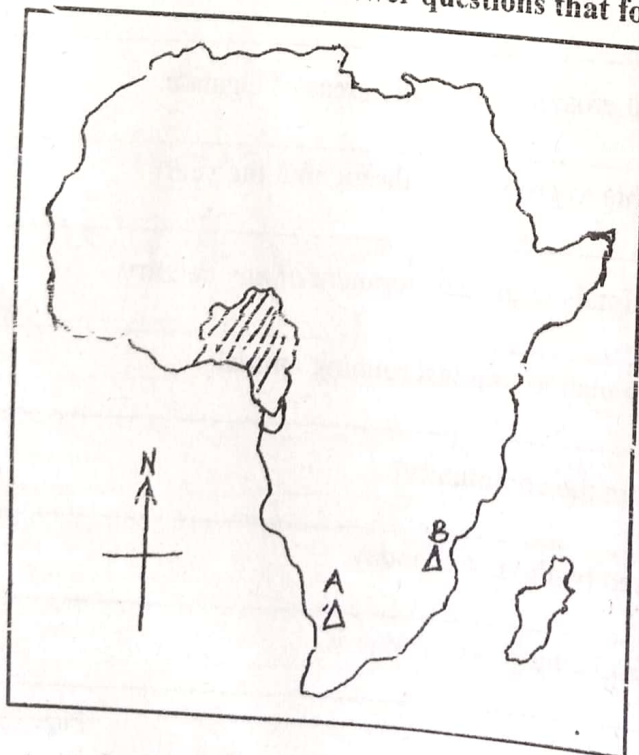
OR: State one way Muslims show respect to Allah during Salat

40. EITHER: Give one contribution of Christian churches in Uganda.

OR: Give any one contribution of Islam in Uganda.


SECTION B (60 MARKS)

41. Study the map of Africa and answer questions that follow:-



a) How is the formation of mountain A different from mount B?

b) Use letter M to locate the largest island country in Africa.

c) Name the vegetation zone labeled . 

d) Using an arrow and letter T, show Suez Canal on the above map.

42. a) Write down two parts of a budget.

(i) _____

(ii) _____

b) Why is it good for a country to make a national budget?

c) Mention the ministry that makes a national budget.

43. a) Who were the founders of Bunyoro Kitara Empire?

b) State two factors that led to the collapse of Bunyoro Kitara Empire.

(i) _____

(ii) _____

c) Mention any one Kingdom that was formed after the collapse of Bunyoro Kitara Empire.

44. a) Why is a swamp regarded as natural vegetation?

b) Write down any two factors that influence vegetation distribution.

(i) _____

(ii) _____

c) Name the vegetation zone which is also called High Velds.

45. a) State any one factor that is responsible for spare population in an area.

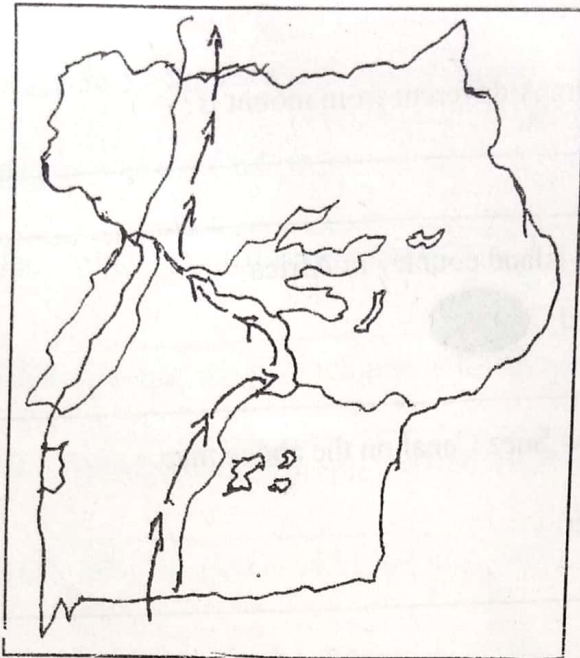
b) Mention any two factors of high population density on the environment of Uganda.

(i) _____

(ii) _____

c) State one reason why the government of Uganda carries out a population census.

46.



a) Identify the two explores that took the route shown by the arrow → → → →

(i) _____

(ii) _____

b) In which way did William MacKinnon help in setting up colonial rule in Uganda?

c) Give one reason why Gerald Portal recommended that the British government take over administration of Uganda?

47. a) State any two major rivers in Africa which end in estuaries.

(i) _____

(ii) _____

b) In which two ways can rivers be used in development?

(i) _____

(ii) _____

48. What is climate? _____

b) Which factor of climate influences human settlement?

c) How do the following factors influence climate?

(i) Altitude: _____

(ii) Prevailing Winds: _____

49. a) Why should Uganda have a good relationship with her neighbouring countries?

b) Give two problems faced by landlocked countries.

(i) _____

(ii) _____

c) State any one way land locked countries can solve problems they face.

50. a) What is a common market?

b) State any two ways countries benefit from being members of common markets.

(i)

(ii)

c) Give any one reason why common markets are formed.

For each of the questions 51 to 54 answer EITHER the Christian OR the Islamic questions but not both in the same question.

51. **EITHER** (a) What is sinning?

b) Give any one cause of sin.

c) Write down two examples of sins according to Christianity.

(i)

(ii)

OR: (a) What is sinning?

b) Write down two examples of sins

(i)

(ii)

c) Give one effect of sinning

52. **EITHER:** a) Why is Mt. Sinai remembered in Christianity?

b) How were the Ten Commandments important to Israelites?

c) Write down two of the Ten Commandments.

(i)

(ii)

OR: a) Write down any two Pillars of Islam

(i)

(ii)

b) State any two ways Muslims prepare for prayers

(i)

(ii)

53. **EITHER:** a) Mention the two groups of missionaries that came to East Africa

(i) _____

(ii) _____

b) Give any one way through which Missionary work led to the development of East Africa

c) How did Missionary work affect the people of East Africa negatively?

OR: a) Who were the Caliphs? _____

b) Write down any three of the Caliphs.

(i) _____

(ii) _____

(iii) _____

c) What was the work of Caliphs?

54. **EITHER a)** Why is prayer important to Christian?

b) Give one type of prayer.

c) Mention two requests from the Lord's Prayer.

(i) _____

(ii) _____

OR a) Why do Muslims pray?

b) Write down two prayers performed by Muslims daily.

(i) _____

(ii) _____

c) What is meant by "Sunnah" in Islam?

55. **BOTH:** a) What is a Talent? _____

b) Give two ways people use their talents to benefit others.

(i) _____

(ii) _____

c) How do people misuse their talents today?